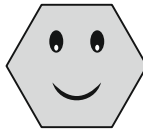


Select the correct option to answer every question given below

General Awareness

- 01. There are 4 sweets in one packet. How many sweets will be there in 9 packets ?**
(A) 12 (B) 24 (C) 36 (D) 45
- 02. Which country is considered to be the biggest in world ?**
(A) China (B) Africa (C) Canada (D) Russia
- 03. Choose the correctly spelt word.**
(A) Centrifuge (B) Centrefuge
(C) Centrifuse (D) Centifuse
- 04. Find the odd words from the given alternatives.**
(A) Sailing (B) Diving
(C) Swimming (D) Driving
- 05. Choose the correct name of the given shape.**



- (A) Octagon (B) Pentagon
(C) Hexagon (D) Decagon
- 06. What does CD-ROM stand for ?**
(A) Compact Drive – Read only Memory
(B) Compact Disc – Random only Memory
(C) Compact Drive – Remote open Memory
(D) Compact Disc – Read only Memory

07. Which of the following is the largest desert in India ?
- (A) Sahara Desert
 - (B) Thar Desert
 - (C) Atacama Desert
 - (D) Gobi Desert
08. What is the name of the holy river flowing near Ayodhya ?
- (A) Ganges
 - (B) Yamuna
 - (C) Saryu
 - (D) Narmada
09. How many hours does the Earth take to complete one rotation around its axis ?
- (A) 12 hours
 - (B) 24 hours
 - (C) 36 hours
 - (D) 48 hours

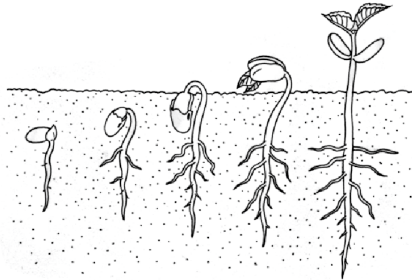
Space for Rough Work

- 10. Greed for which of the following activities is bad ?**
- (A) Everything (B) Anything
(C) Stealing (D) Laughing
- 11. Sunitha and her mother were cooking a meal in the kitchen. What is the correct way to maintain proper sanitation in the kitchen ?**
- (A) Wash hands with soap and water before handling food.
(B) Use any detergent for cleaning dishes.
(C) Store raw & cooked food together in the same container.
(D) Leave leftovers on the kitchen counter overnight.
- 12. Which of the following activities can you do at home to conserve energy ?**
- (A) Turn off the lights when you are watching the television.
(B) Unplug the appliances when not using them.
(C) Opening all the curtains when everyone is sleeping.
(D) Wash the cleaned clothes repeatedly without using them.

Space for Rough Work

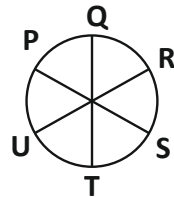
Critical Thinking

13. If in a certain code, TOUR is written as 1234, CLEAR is written as 56789 and SPARE is coded as 90847, then what will be the fifth digit for the word SCULPTURE in the same code ?
 (A) 2 (B) 4 (C) 6 (D) 0
14. What do you infer from the figure given below ?



- (A) Living things move
 (B) Living things grow
 (C) Living things respond to stimulus
 (D) Living things need food
15. The following figure shows six persons sitting around a circular table facing the centre. Who is sitting second to the left of 'U' ?

- (A) P (B) T
 (C) Q (D) R



KEY

01. C	02. D	03. A	04. D	05. C	06. D	07. B	08. C	09. B	10. A
11. A	12. B	13. D	14. B	15. A					